



MOMENTOS DE MATEMÁTICA

Escola:

Aluno:

1º Ciclo

Ano: Turma: Professor(a):

Cálculo de Produtos pelo Algoritmo

◀ ATIVIDADE 4 ▶


Usando a **chave** apresentada à esquerda, descubra a palavra, relacionada com cada uma das figuras, que cada produto esconde.

Chave

Num.	Letra
0	a
1	b
2	c
3	d
4	e
5	f
6	g
7	h
8	i
9	j
0	k
1	l
2	m
3	n
4	o
5	p
6	q
7	r
8	s
9	t
0	u
1	v
2	x
4	w
5	z

Exercício 1

$$\begin{array}{r} 535 \\ \times 2 \\ \hline \square\square\square\square \end{array}$$



Exercício 2

$$\begin{array}{r} 304,25 \\ \times 8 \\ \hline \square\square\square\square,\square\square \end{array}$$



Exercício 3

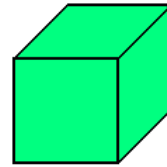
$$\begin{array}{r} 419634 \\ \times 5 \\ \hline \square\square\square\square\square\square\square \end{array}$$



Exercício 4

$$\begin{array}{r} 6281 \\ \times 8 \\ \hline \end{array}$$

□□□□□



Chave

Num.	Letra
0	a
1	b
2	c
3	d
4	e
5	f
6	g
7	h
8	i
9	j
0	k
1	l
2	m
3	n
4	o
5	p
6	q
7	r
8	s
9	t
0	u
1	v
2	x
4	w
5	z

Exercício 5

$$\begin{array}{r} 1201729 \\ \times 6 \\ \hline \end{array}$$

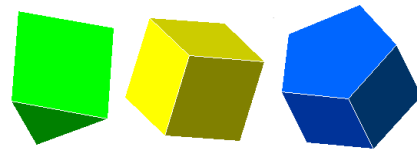
□□□□□□□



Exercício 6

$$\begin{array}{r} 28941 \\ \times 20 \\ \hline \end{array}$$


□□□□□□



Exercício 7

$$\begin{array}{r} 5075,75 \\ \times 40 \\ \hline \end{array}$$

□□□□□□,□□



Exercício 8

$$\begin{array}{r} 478669 \\ \times 6 \\ \hline \end{array}$$

□□□□□□□



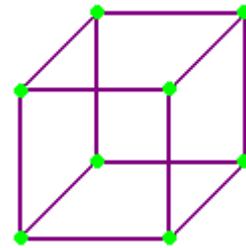
Exercício 9

$$\begin{array}{r} 46244,5 \\ \times 32 \\ \hline \end{array}$$

□□□□□□

□□□□□□□

□□□□□□□□,



Chave

Num.	Letra
0	a
1	b
2	c
3	d
4	e
5	f
6	g
7	h
8	i
9	j
0	k
1	l
2	m
3	n
4	o
5	p
6	q
7	r
8	s
9	t
0	u
1	v
2	x
4	w
5	z

Exercício 10

$$\begin{array}{r} 3369402 \\ \times 15 \\ \hline \end{array}$$

□□□□□□□□

□□□□□□□

□□□□□□□□



Exercício 11

$$\begin{array}{r} 782871,5 \\ \times 36 \\ \hline \end{array}$$

□□□□□□□□

□□□□□□□□

□□□□□□□□,



Exercício 12

$$\begin{array}{r} 153481,2 \\ \times 25 \\ \hline \end{array}$$

□□□□□□□

□□□□□□□

□□□□□□□□,



Chave

Num.	Letra
0	a
1	b
2	c
3	d
4	e
5	f
6	g
7	h
8	i
9	j
0	k
1	l
2	m
3	n
4	o
5	p
6	q
7	r
8	s
9	t
0	u
1	v
2	x
4	w
5	z

Exercício 13

$$\begin{array}{r} 17153662 \\ \times 35 \\ \hline \end{array}$$

□□□□□□□□

□□□□□□□□

□□□□□□□□□□



Exercício 14

$$\begin{array}{r} 52648 \\ \times 709 \\ \hline \end{array}$$

□□□□□□

□□□□□□

□□□□□□□□

$$\begin{array}{r} + 16859002 \\ \hline \end{array}$$

□□□□□□□□

